

परमाणु ऊर्जा शिक्षण संस्था, मुंबई

Atomic Energy Education Society

Session : 2023-24

Class : 4

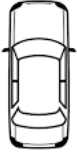
Subject : Maths

Worksheet No. 1

Name of the chapter : Lesson 5 - The Way The World Looks

Topic : Complete Lesson

I) Select the correct answer and fill in the blanks.



1) This is the _____ view of the car.

- a) top b) side c) front



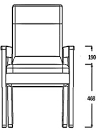
2) This is the _____ view of the car.

- a) top b) side c) front



3) This is the _____ view of the car.

- a) top b) side c) front



4) This is the _____ view of the chair.

- a) top b) side c) front



5) _____ This is the _____ view of the chair.

- a) top b) side c) front



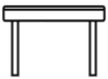
6) _____ This is the _____ view of the chair.

- a) top b) side c) front



7) _____ This is the _____ view of the table.

- a) top b) side c) front



8) _____ This is the _____ view of the table.

- a) top b) side c) front



This is the _____ view of the table.

- a) top b) side c) front



10) _____ This is the _____ view of the cup.

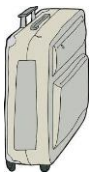
- a) top b) side c) front

II) Fill in the blanks.

- 1) The side view of a cup is _____ .
- 2) The front view of a cup is _____ .
- 3) The top view of a staircase is _____ .
- 4) The side view of a staircase is _____ .
- 5) The front view of a staircase is _____ .
- 6) The top view of a fan is _____ .
- 7) The side view of a fan is _____ .
- 8) The front view of a fan is _____ .
- 9) The top view of a bus is _____ .
- 10) The side view of a bus is _____ .

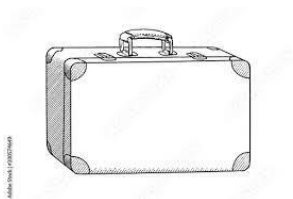
III) Say true or false. If false, write the correct sentence.

- 1) This is the front view of a suitcase.



Ans. _____

- 2) This is the top view of a suitcase.



Ans. _____

3) This is the top view of a mug.



Ans. _____

4) This is the side view of a mug.



Ans. _____

5) This is the top view of a bucket.



Ans. _____

6) This is the side view of a bucket.



Ans. _____

7) This is the side view of a shoe.



Ans. _____

8) This is the top view of a shoe.



Ans. _____

9) This is the side view of a shoe.



Ans. _____

10) This is the top view of a water melon.



Ans. _____

IV) Draw the front, top and side view of the following objects.

Front view

Top view

Side view

1) Railway line

2) Book


3) Table

4) Cylinder

5) Shoe

V) Do as directed.

1) Observe the map and answer the following questions.



a) Which is nearer to home - school or community centre.

Ans. _____

b) What is opposite the post office?

Ans. _____

c) What is beside the post office?

Ans. _____


d) How many routes are there to go to school from home?

Ans. _____

e) What is farthest from the bank?

Ans. _____

2) Observe the map and answer the following questions.



Mall _____ Hotel _____ College _____ Park

a) Which is nearer to the market – home or park?

Ans. _____

b) What is opposite the school – college or mall?

Ans. _____

c) If you want to reach Sports club from home, which route would you take to reach quickly?

Ans. _____

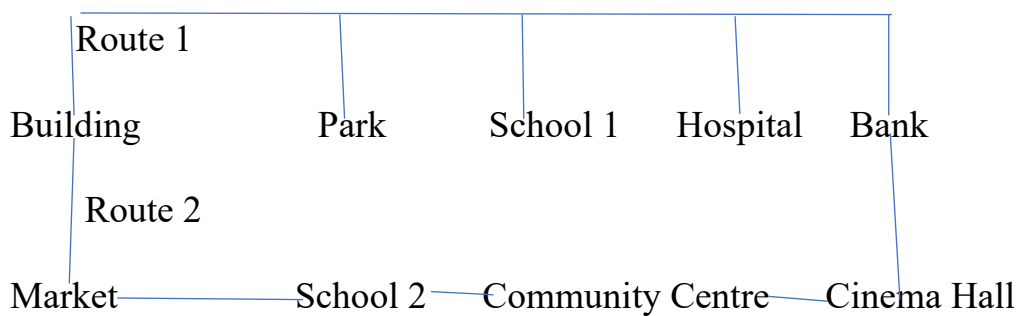
d) The hotel and market are opposite each other. True or false.

Ans. _____

e) To reach the park from the mall, which two places have to be crossed?

Ans. _____

3) Observe the map and answer the following questions.



a) The bank and cinema hall are opposite to each other – true or false.

Ans. _____

b) Which route would you take to reach the building quickly from bank?

Ans. _____

c) School 2 is opposite which place – park or hospital?

Ans. _____






d) To reach community centre from your building quickly - which route you have to take?

Ans. _____

e) Which places are on either side of school 1?

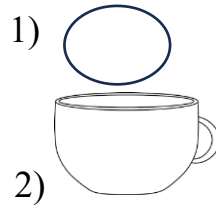
Ans. _____

4) Match the following.

- | | |
|---------------------|--|
| a) plate top view | 1)  |
| b) plate side view | 2)  |
| c) funnel side view | 3)  |
| d) cylinder | 4)  |
| e) funnel top view | 5)  |

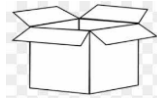
5) Match the following.

a) cup front view



b) cup top view

2)



c) bag front view

4)



d) bag side view

5)



e) box side view